



Übungsblatt 3 · Zahlen bis 5

Zahlen bis 5 · matheule.de

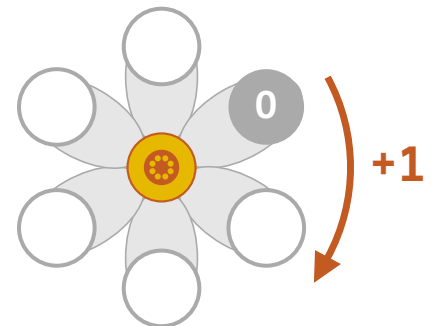
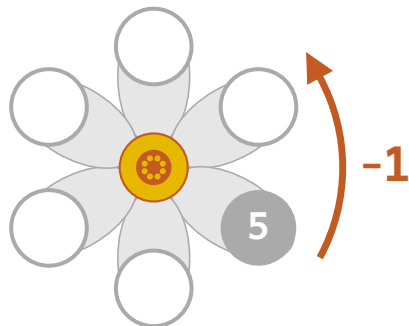
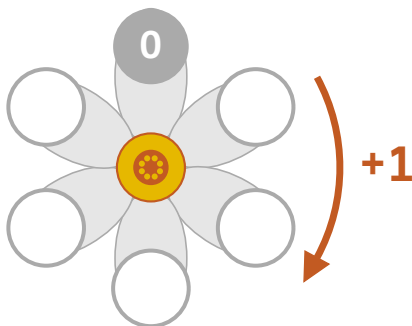
Ergänze die fehlenden Zahlen!

→ matheule.de/es/ayuda/clase1/recta-numerica



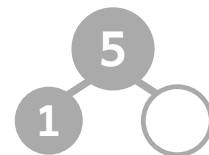
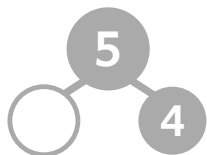
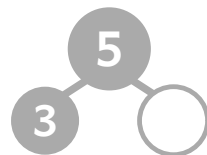
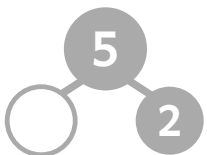
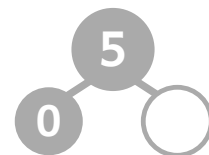
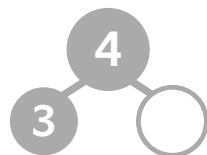
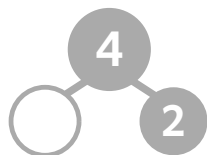
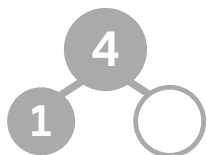
Die Zahlenblume

→ matheule.de/es/ayuda/clase1/flor-de-numeros



Zerlege die Zahlen!

→ matheule.de/es/ayuda/clase1/descomponer



Minus - Rechne aus!

→ matheule.de/es/ayuda/clase1/calculo

$$3 - 1 = \square$$

$$4 - 2 = \square$$

$$5 - 3 = \square$$

$$5 - 1 = \square$$

$$4 - 3 = \square$$

$$5 - 0 = \square$$

$$3 - 2 = \square$$

$$4 - 1 = \square$$

$$5 - 4 = \square$$



Encuentra más ejercicios en el libro:
[enlace de compra próximamente]