

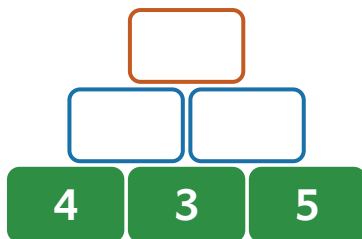
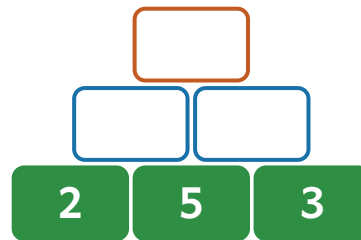
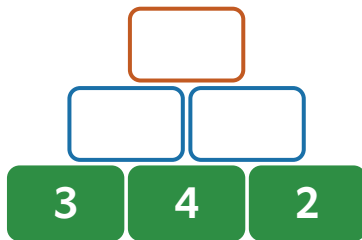


# Übungsblatt 3 · Zahlen bis 20

Zahlen bis 20 · matheule.de

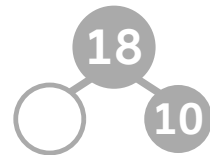
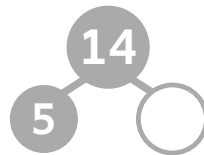
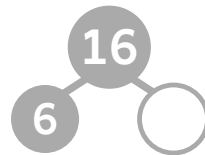
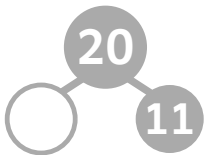
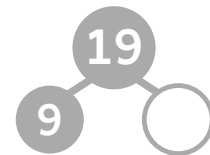
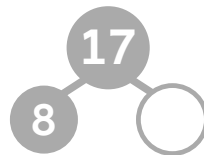
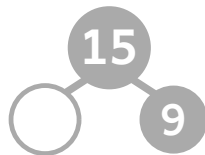
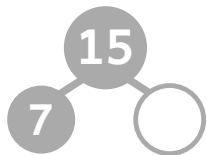
## Mauer bis 20

→ [matheule.de/es/ayuda/clase1/muro-numerico](https://matheule.de/es/ayuda/clase1/muro-numerico)



## Zerlege bis 20

→ [matheule.de/es/ayuda/clase1/descomponer](https://matheule.de/es/ayuda/clase1/descomponer)



## Wie oft passt die Zahl hinein?

→ [matheule.de/es/ayuda/clase1/multiplicar](https://matheule.de/es/ayuda/clase1/multiplicar)

$3 + \boxed{\phantom{000}} = 12 \Rightarrow 3 \text{ cabe } \boxed{\phantom{00}} \text{ veces en } 12.$

$4 + \boxed{\phantom{000}} = 16 \Rightarrow 4 \text{ cabe } \boxed{\phantom{00}} \text{ veces en } 16.$

$2 + \boxed{\phantom{000}} = 14 \Rightarrow 2 \text{ cabe } \boxed{\phantom{00}} \text{ veces en } 14.$

$5 + \boxed{\phantom{000}} = 20 \Rightarrow 5 \text{ cabe } \boxed{\phantom{00}} \text{ veces en } 20.$



Encuentra más ejercicios en el libro:  
[enlace de compra próximamente]